

J&K POLICE PUBLIC SCHOOL MIRAN SAHIB JAMMU

ASSIGNMENT – 2

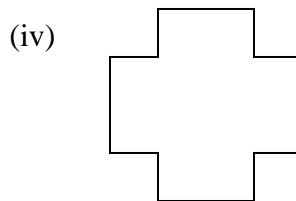
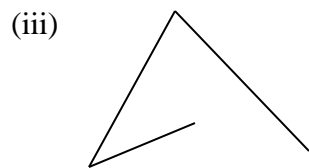
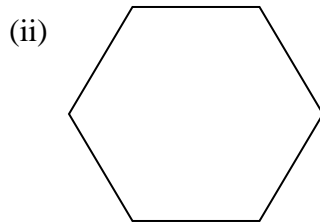

CLASS – V

SUBJECT – MATHS

NAME OF THE TEACHER – RUPINDER KOUR

M.MARKS – 20

Q.1 Identify the open and closed figures : (4m)



Q.2 Identify the angles as right angle, acute angle, obtuse angle or straight angle : (4m)


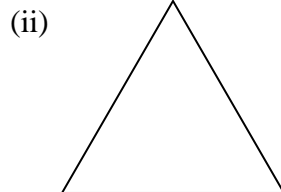
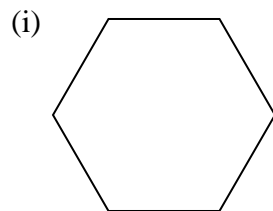
(i) 45°

(ii) 165°

(iii) 180°

(iv) 90°

Q.3 Count the number of angles in the given figures and write against each figure : (4m)



Q.4 Draw angles whose measures are : (8m)

(i) 90°

(ii) 45°

(iii) 180°

(iv) 120°